



TEST HOW MUCH YOU KNOW.


Name _____ T.Code. _____ Gr. Lev. _____
(First and Last Name)


WORD LIST: fermata sharp double bar line measure
for #1 bar line flat repeat sign staff


1. Write the correct word in the blanks below:


A.  is a music _____ .


B.  shows a _____ .


C. A _____ () goes from bar line to bar line.

D.  is a _____ .

E.  is a _____ .

F.  is a _____ & means play 1/2 step higher.

G.  is a _____ & means play 1/2 step lower.

H.  is a _____ .

2. Circle the clef is for the high notes:





Circle the clef is for the low notes:





3. **Draw:** 3 Bass Clefs:


3 Treble Clefs:




4. Name these notes and tell how many beats each gets in $\frac{4}{4}$ time:

 is an _____ note and = ____ beat(s)

 is a _____ note and = ____ beat(s)

 is a _____ note and = ____ beat(s)

 is a _____ note and = ____ beat(s)

5. Fill in bar lines to make correct measures:



6. **MATCHING:** Put the letter of the correct definition in each blank.

1. ____ *mp*

A. **crescendo--get gradually louder**

2. ____ *rit.*

B. **natural-cancel sharp or flat**

3. ____ 

C. **sing or play medium soft**

4. ____ 

D. **sing or play loudly**

5. ____ 

E. **to get slower**

6. ____ *f*

F. **Coda**